



INVESTICE DO ROZVOJE VZDĚLÁVÁNÍ

N Á S O B E N Í

**Cíl : Úvod do násobení, jednoduché
2.třída**


**Mgr. Alena
ZŠ Brodek u**

OPVK EU PŠ M-10-










$$3 + 3 + 3 = 9$$

$$3 \cdot 3 = 9$$



$$2 + 2 + 2 = 6$$

$$3 \cdot 2 = 6$$





Pepík, Franta a Josef šli do cukrárny na zmrzlinu. Každý z nich si dal tři kopečky. Kolik kopečků zmrzliny měli ?

4 . 2



5 . 4

5 . 3



4 . 4

3 . 4

2 . 6

7 . 2

Spoj příklady se správnými obrázky.



2 . 3

5 . 4

3 . 5

6 . 3

